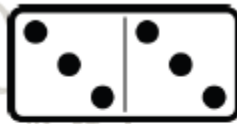
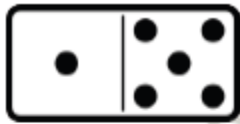



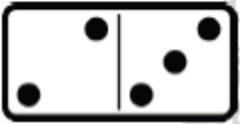
Domino Addition

Directions: Count the number of dots on each domino and write the numbers on the lines. Add up the dots and put the sum in the box.



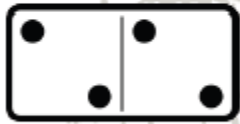
$1 + 4 = \square$

$3 + 3 = \square$



$2 + 2 = \square$

$6 + 3 = \square$



$2 + 2 = \square$

$4 + 0 = \square$